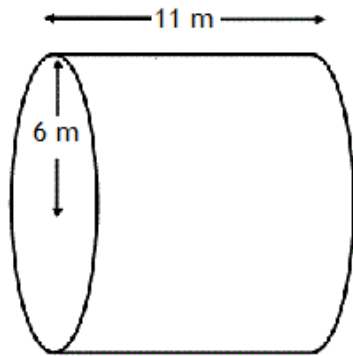


Name _____ Hour _____

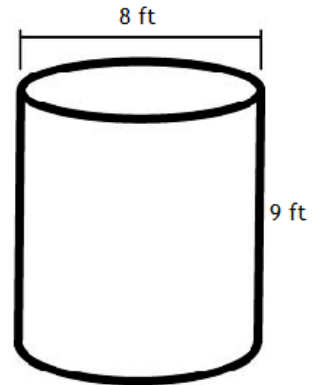
Volume of Cylinders and Cones (Day 1)

Find the volume of each figure. Use the π key if necessary. Round answers to the nearest hundredth.

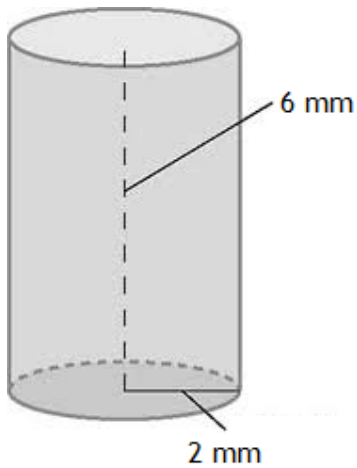
1.



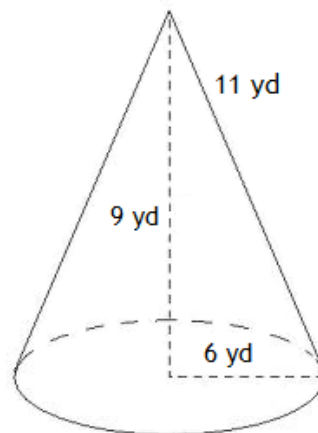
2.



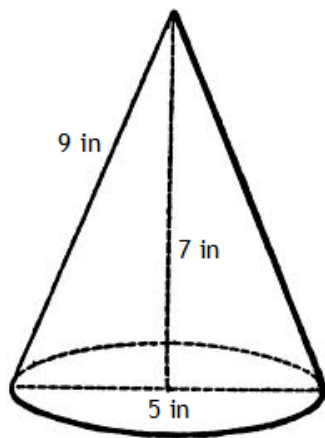
3.



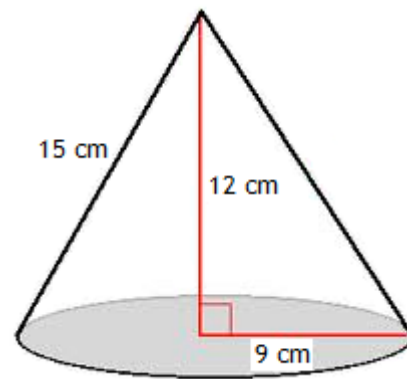
4.



5.



6.



7. Find the volume of a cylinder: height 12 inches, diameter 15 inches.

8. Find the volume of a cylinder: height 2 cm, radius 5 cm.

9. Find the volume of a cone: height 12 feet, radius 3 feet.

10. Find the volume of a cone: height 9 meters, diameter 9 meters.